



4th Grade Summer Packet

- Complete the four “Math Minute” pages to the best of your ability.

- Complete the four multiplication and four division facts sheets (one for each week of summer). For each one, ask a parent/adult to set a timer for 5 minutes and answer as many questions as you can on your own. Stop when the timer goes off.

- Read any one book below. Circle the book that you choose and complete the attached book report. All books listed are within the 4th grade reading level, but I have indicated whether they are within the lower (L), medium (M) or higher (H) ranges. Please help your child select a book within their comfort level.
 - The One and Only Ivan by Katherine Applegate (L)
 - How to Eat Fried Worms by Thomas Rockwell (M)
 - Charlotte's Web by E. B. White (M)
 - Shiloh by Phyllis Reynolds (M)
 - Sounder by William H. Armstrong (H)
 - The Incredible Journey by Sheila Burnford (H)

- Read one book of the student’s choice, but must be at least a 3.5 AR level unless noted by third grade teacher. Students are to neatly draw a color a picture of their favorite scene from the book on the attached sheet. They will share it with the class.

I have completed all the above work.

I have checked to ensure my child has completed the assigned summer work.

Student

Parent

Date

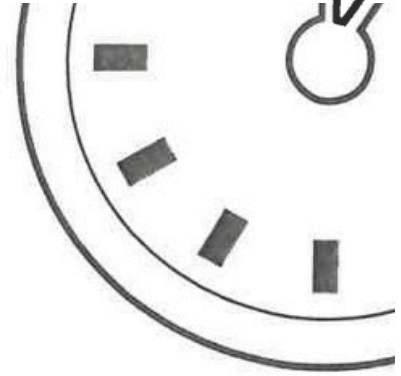
Date

This sheet along with the Math Minutes and multiplication/division drill sheets will be due the first full day of school.

See you in August!
4th Grade Teachers



MINUTE 1



NAME _____

1. The area of the shape is 6 square units.
Circle: True or False

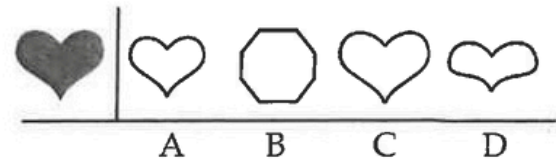


2. Jenna wants to purchase a pad of drawing paper for \$5.00, a charcoal pencil for \$0.75, and an eraser for \$1.25. How much money does she need altogether to buy the supplies? _____

3.
$$\begin{array}{r} 45 \\ + 4 \\ \hline \end{array}$$

4. Complete the fact family.
 $5 \times 7 = 35$
 $7 \times 5 = \underline{\hspace{2cm}}$
 $35 \div 7 = \underline{\hspace{2cm}}$
 $35 \div 5 = \underline{\hspace{2cm}}$

5. Circle the figure that matches the shaded figure:



6. The difference of 8 and 5 is _____.

7. The expanded form of 654 is $600 + 50 + \underline{\hspace{2cm}}$.

8. The sum of 8 and 5 is _____.


For questions 9 and 10, circle the digit in the tens place.

9. 456

10. 925



MINUTE 2



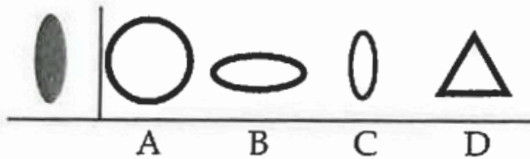
NAME _____

1. $15 - 8 =$

2. 4, 8, 12, 16, 20, _____, _____, _____

3.
$$\begin{array}{r} 33 \\ + 5 \\ \hline \end{array}$$

4. Circle the figure that is congruent to the shaded figure:



5.
$$\begin{array}{r} 33 \\ - 5 \\ \hline \end{array}$$

6. Complete the fact family.

$6 \times 7 = 42$


$7 \times 6 = \underline{\hspace{2cm}}$

$42 \div 7 = \underline{\hspace{2cm}}$

$42 \div 6 = \underline{\hspace{2cm}}$


7.
$$\begin{array}{r} 12 \\ \times 6 \\ \hline \end{array}$$

In questions 8–10, does the figure have a line of symmetry?
Write *yes* or *no*. If yes, draw a line of symmetry.





MINUTE 3

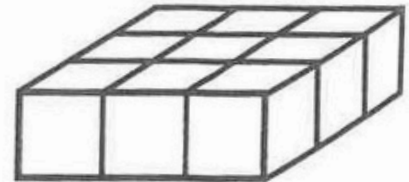


NAME _____

1. $4 \overline{)72}$

2. $\begin{array}{r} 21 \\ + 6 \\ \hline \end{array}$

3. The volume of the shape is 9 cubic units.
Circle: True or False



4. Complete the fact family.

$$5 \times 8 = 40$$

$$8 \times 5 = \underline{\quad}$$

$$40 \div 8 = \underline{\quad}$$

$$40 \div 5 = \underline{\quad}$$

5. Polly bought a new collar and leash for her dog. The total was \$7.50. She paid with a ten-dollar bill. How much change did she receive?

6. $\begin{array}{r} 45 \\ - 3 \\ \hline \end{array}$

7. $\begin{array}{r} 14 \\ \times 5 \\ \hline \end{array}$

Use $<$, $>$, or $=$ to complete questions 8–10.


8. $3 \underline{\quad} 13$

9. $31 \underline{\quad} 13$

10. $310 \underline{\quad} 310$



MINUTE 4



NAME _____

1.
$$\begin{array}{r} 85 \\ - 2 \\ \hline \end{array}$$

2. $7 \overline{)35}^5$ Which number is the dividend in this problem? _____

3. Riley has a 100-page book. She has read half of it. How many pages does she have left to read? _____ pages



4. Complete the fact family.
 $9 \times 4 = \underline{\hspace{2cm}}$
 $4 \times 9 = \underline{\hspace{2cm}}$
 $36 \div 9 = \underline{\hspace{2cm}}$
 $36 \div 4 = \underline{\hspace{2cm}}$



5. $4 \overline{)28}$



6.
$$\begin{array}{r} 62 \\ + 7 \\ \hline \end{array}$$

7.
$$\begin{array}{r} 16 \\ \times 7 \\ \hline \end{array}$$

For questions 8–10, write the equivalent fraction.

8.  =  $\frac{2}{4} = \underline{\hspace{2cm}}$

9.  =  $\frac{3}{9} = \underline{\hspace{2cm}}$

10.  =  $\frac{2}{10} = \underline{\hspace{2cm}}$

Multiplication Facts to 144 (A)

Name: _____

Date: _____

Score: ____ /50

Calculate each product.

$$\begin{array}{r} 9 \\ \times 8 \\ \hline \end{array} \quad \begin{array}{r} 3 \\ \times 1 \\ \hline \end{array} \quad \begin{array}{r} 1 \\ \times 10 \\ \hline \end{array} \quad \begin{array}{r} 5 \\ \times 7 \\ \hline \end{array} \quad \begin{array}{r} 2 \\ \times 6 \\ \hline \end{array} \quad \begin{array}{r} 6 \\ \times 7 \\ \hline \end{array} \quad \begin{array}{r} 4 \\ \times 7 \\ \hline \end{array} \quad \begin{array}{r} 2 \\ \times 11 \\ \hline \end{array} \quad \begin{array}{r} 5 \\ \times 4 \\ \hline \end{array} \quad \begin{array}{r} 11 \\ \times 5 \\ \hline \end{array}$$

$$\begin{array}{r} 7 \\ \times 7 \\ \hline \end{array} \quad \begin{array}{r} 7 \\ \times 11 \\ \hline \end{array} \quad \begin{array}{r} 12 \\ \times 12 \\ \hline \end{array} \quad \begin{array}{r} 8 \\ \times 1 \\ \hline \end{array} \quad \begin{array}{r} 4 \\ \times 6 \\ \hline \end{array} \quad \begin{array}{r} 10 \\ \times 9 \\ \hline \end{array} \quad \begin{array}{r} 12 \\ \times 2 \\ \hline \end{array} \quad \begin{array}{r} 2 \\ \times 2 \\ \hline \end{array} \quad \begin{array}{r} 2 \\ \times 1 \\ \hline \end{array} \quad \begin{array}{r} 7 \\ \times 3 \\ \hline \end{array}$$

$$\begin{array}{r} 9 \\ \times 6 \\ \hline \end{array} \quad \begin{array}{r} 11 \\ \times 10 \\ \hline \end{array} \quad \begin{array}{r} 10 \\ \times 10 \\ \hline \end{array} \quad \begin{array}{r} 1 \\ \times 11 \\ \hline \end{array} \quad \begin{array}{r} 8 \\ \times 8 \\ \hline \end{array} \quad \begin{array}{r} 7 \\ \times 1 \\ \hline \end{array} \quad \begin{array}{r} 1 \\ \times 9 \\ \hline \end{array} \quad \begin{array}{r} 1 \\ \times 6 \\ \hline \end{array} \quad \begin{array}{r} 2 \\ \times 5 \\ \hline \end{array} \quad \begin{array}{r} 12 \\ \times 1 \\ \hline \end{array}$$

$$\begin{array}{r} 7 \\ \times 8 \\ \hline \end{array} \quad \begin{array}{r} 8 \\ \times 4 \\ \hline \end{array} \quad \begin{array}{r} 5 \\ \times 3 \\ \hline \end{array} \quad \begin{array}{r} 10 \\ \times 5 \\ \hline \end{array} \quad \begin{array}{r} 5 \\ \times 5 \\ \hline \end{array} \quad \begin{array}{r} 4 \\ \times 3 \\ \hline \end{array} \quad \begin{array}{r} 5 \\ \times 6 \\ \hline \end{array} \quad \begin{array}{r} 3 \\ \times 2 \\ \hline \end{array} \quad \begin{array}{r} 3 \\ \times 3 \\ \hline \end{array} \quad \begin{array}{r} 12 \\ \times 10 \\ \hline \end{array}$$

$$\begin{array}{r} 9 \\ \times 9 \\ \hline \end{array} \quad \begin{array}{r} 9 \\ \times 2 \\ \hline \end{array} \quad \begin{array}{r} 2 \\ \times 4 \\ \hline \end{array} \quad \begin{array}{r} 7 \\ \times 12 \\ \hline \end{array} \quad \begin{array}{r} 6 \\ \times 6 \\ \hline \end{array} \quad \begin{array}{r} 8 \\ \times 5 \\ \hline \end{array} \quad \begin{array}{r} 2 \\ \times 7 \\ \hline \end{array} \quad \begin{array}{r} 11 \\ \times 9 \\ \hline \end{array} \quad \begin{array}{r} 5 \\ \times 9 \\ \hline \end{array} \quad \begin{array}{r} 10 \\ \times 7 \\ \hline \end{array}$$

Multiplication Facts to 144 (B)

Name: _____

Date: _____

Score: _____ /50

Calculate each product.

$$\begin{array}{r} 11 \\ \times 7 \\ \hline \end{array} \quad \begin{array}{r} 12 \\ \times 12 \\ \hline \end{array} \quad \begin{array}{r} 6 \\ \times 11 \\ \hline \end{array} \quad \begin{array}{r} 12 \\ \times 11 \\ \hline \end{array} \quad \begin{array}{r} 6 \\ \times 6 \\ \hline \end{array} \quad \begin{array}{r} 10 \\ \times 7 \\ \hline \end{array} \quad \begin{array}{r} 2 \\ \times 9 \\ \hline \end{array} \quad \begin{array}{r} 1 \\ \times 2 \\ \hline \end{array} \quad \begin{array}{r} 3 \\ \times 8 \\ \hline \end{array} \quad \begin{array}{r} 10 \\ \times 6 \\ \hline \end{array}$$

$$\begin{array}{r} 11 \\ \times 8 \\ \hline \end{array} \quad \begin{array}{r} 6 \\ \times 9 \\ \hline \end{array} \quad \begin{array}{r} 12 \\ \times 5 \\ \hline \end{array} \quad \begin{array}{r} 1 \\ \times 4 \\ \hline \end{array} \quad \begin{array}{r} 1 \\ \times 8 \\ \hline \end{array} \quad \begin{array}{r} 10 \\ \times 8 \\ \hline \end{array} \quad \begin{array}{r} 10 \\ \times 11 \\ \hline \end{array} \quad \begin{array}{r} 5 \\ \times 7 \\ \hline \end{array} \quad \begin{array}{r} 2 \\ \times 12 \\ \hline \end{array} \quad \begin{array}{r} 10 \\ \times 4 \\ \hline \end{array}$$

$$\begin{array}{r} 6 \\ \times 12 \\ \hline \end{array} \quad \begin{array}{r} 3 \\ \times 9 \\ \hline \end{array} \quad \begin{array}{r} 11 \\ \times 11 \\ \hline \end{array} \quad \begin{array}{r} 4 \\ \times 2 \\ \hline \end{array} \quad \begin{array}{r} 4 \\ \times 7 \\ \hline \end{array} \quad \begin{array}{r} 5 \\ \times 11 \\ \hline \end{array} \quad \begin{array}{r} 12 \\ \times 9 \\ \hline \end{array} \quad \begin{array}{r} 9 \\ \times 5 \\ \hline \end{array} \quad \begin{array}{r} 9 \\ \times 10 \\ \hline \end{array} \quad \begin{array}{r} 7 \\ \times 3 \\ \hline \end{array}$$

$$\begin{array}{r} 8 \\ \times 4 \\ \hline \end{array} \quad \begin{array}{r} 7 \\ \times 2 \\ \hline \end{array} \quad \begin{array}{r} 11 \\ \times 1 \\ \hline \end{array} \quad \begin{array}{r} 2 \\ \times 2 \\ \hline \end{array} \quad \begin{array}{r} 1 \\ \times 1 \\ \hline \end{array} \quad \begin{array}{r} 7 \\ \times 12 \\ \hline \end{array} \quad \begin{array}{r} 3 \\ \times 4 \\ \hline \end{array} \quad \begin{array}{r} 4 \\ \times 11 \\ \hline \end{array} \quad \begin{array}{r} 2 \\ \times 10 \\ \hline \end{array} \quad \begin{array}{r} 2 \\ \times 3 \\ \hline \end{array}$$

$$\begin{array}{r} 3 \\ \times 3 \\ \hline \end{array} \quad \begin{array}{r} 7 \\ \times 8 \\ \hline \end{array} \quad \begin{array}{r} 3 \\ \times 1 \\ \hline \end{array} \quad \begin{array}{r} 8 \\ \times 5 \\ \hline \end{array} \quad \begin{array}{r} 10 \\ \times 1 \\ \hline \end{array} \quad \begin{array}{r} 12 \\ \times 10 \\ \hline \end{array} \quad \begin{array}{r} 4 \\ \times 4 \\ \hline \end{array} \quad \begin{array}{r} 7 \\ \times 7 \\ \hline \end{array} \quad \begin{array}{r} 8 \\ \times 2 \\ \hline \end{array} \quad \begin{array}{r} 5 \\ \times 1 \\ \hline \end{array}$$

Multiplication Facts to 144 (C)

Name: _____

Date: _____

Score: ____ /50

Calculate each product.

$$\begin{array}{r} 7 \\ \times 10 \\ \hline \end{array} \quad \begin{array}{r} 11 \\ \times 8 \\ \hline \end{array} \quad \begin{array}{r} 12 \\ \times 4 \\ \hline \end{array} \quad \begin{array}{r} 1 \\ \times 1 \\ \hline \end{array} \quad \begin{array}{r} 7 \\ \times 1 \\ \hline \end{array} \quad \begin{array}{r} 7 \\ \times 7 \\ \hline \end{array} \quad \begin{array}{r} 12 \\ \times 8 \\ \hline \end{array} \quad \begin{array}{r} 6 \\ \times 8 \\ \hline \end{array} \quad \begin{array}{r} 1 \\ \times 9 \\ \hline \end{array} \quad \begin{array}{r} 6 \\ \times 2 \\ \hline \end{array}$$

$$\begin{array}{r} 12 \\ \times 10 \\ \hline \end{array} \quad \begin{array}{r} 11 \\ \times 11 \\ \hline \end{array} \quad \begin{array}{r} 4 \\ \times 2 \\ \hline \end{array} \quad \begin{array}{r} 6 \\ \times 3 \\ \hline \end{array} \quad \begin{array}{r} 8 \\ \times 4 \\ \hline \end{array} \quad \begin{array}{r} 5 \\ \times 1 \\ \hline \end{array} \quad \begin{array}{r} 12 \\ \times 5 \\ \hline \end{array} \quad \begin{array}{r} 2 \\ \times 10 \\ \hline \end{array} \quad \begin{array}{r} 9 \\ \times 4 \\ \hline \end{array} \quad \begin{array}{r} 2 \\ \times 2 \\ \hline \end{array}$$

$$\begin{array}{r} 10 \\ \times 9 \\ \hline \end{array} \quad \begin{array}{r} 2 \\ \times 5 \\ \hline \end{array} \quad \begin{array}{r} 9 \\ \times 7 \\ \hline \end{array} \quad \begin{array}{r} 11 \\ \times 6 \\ \hline \end{array} \quad \begin{array}{r} 11 \\ \times 10 \\ \hline \end{array} \quad \begin{array}{r} 7 \\ \times 12 \\ \hline \end{array} \quad \begin{array}{r} 11 \\ \times 4 \\ \hline \end{array} \quad \begin{array}{r} 1 \\ \times 3 \\ \hline \end{array} \quad \begin{array}{r} 8 \\ \times 2 \\ \hline \end{array} \quad \begin{array}{r} 4 \\ \times 6 \\ \hline \end{array}$$

$$\begin{array}{r} 3 \\ \times 5 \\ \hline \end{array} \quad \begin{array}{r} 3 \\ \times 3 \\ \hline \end{array} \quad \begin{array}{r} 6 \\ \times 1 \\ \hline \end{array} \quad \begin{array}{r} 8 \\ \times 3 \\ \hline \end{array} \quad \begin{array}{r} 12 \\ \times 3 \\ \hline \end{array} \quad \begin{array}{r} 2 \\ \times 9 \\ \hline \end{array} \quad \begin{array}{r} 6 \\ \times 6 \\ \hline \end{array} \quad \begin{array}{r} 12 \\ \times 1 \\ \hline \end{array} \quad \begin{array}{r} 9 \\ \times 11 \\ \hline \end{array} \quad \begin{array}{r} 4 \\ \times 5 \\ \hline \end{array}$$

$$\begin{array}{r} 6 \\ \times 12 \\ \hline \end{array} \quad \begin{array}{r} 4 \\ \times 4 \\ \hline \end{array} \quad \begin{array}{r} 9 \\ \times 8 \\ \hline \end{array} \quad \begin{array}{r} 5 \\ \times 10 \\ \hline \end{array} \quad \begin{array}{r} 3 \\ \times 2 \\ \hline \end{array} \quad \begin{array}{r} 7 \\ \times 6 \\ \hline \end{array} \quad \begin{array}{r} 2 \\ \times 12 \\ \hline \end{array} \quad \begin{array}{r} 8 \\ \times 7 \\ \hline \end{array} \quad \begin{array}{r} 3 \\ \times 7 \\ \hline \end{array} \quad \begin{array}{r} 8 \\ \times 10 \\ \hline \end{array}$$

Multiplication Facts to 144 (D)

Name: _____

Date: _____

Score: _____ /50

Calculate each product.

$$\begin{array}{r} 2 \\ \times 6 \\ \hline \end{array} \quad \begin{array}{r} 8 \\ \times 7 \\ \hline \end{array} \quad \begin{array}{r} 6 \\ \times 5 \\ \hline \end{array} \quad \begin{array}{r} 10 \\ \times 6 \\ \hline \end{array} \quad \begin{array}{r} 4 \\ \times 1 \\ \hline \end{array} \quad \begin{array}{r} 4 \\ \times 5 \\ \hline \end{array} \quad \begin{array}{r} 8 \\ \times 11 \\ \hline \end{array} \quad \begin{array}{r} 1 \\ \times 8 \\ \hline \end{array} \quad \begin{array}{r} 12 \\ \times 7 \\ \hline \end{array} \quad \begin{array}{r} 2 \\ \times 3 \\ \hline \end{array}$$

$$\begin{array}{r} 9 \\ \times 1 \\ \hline \end{array} \quad \begin{array}{r} 12 \\ \times 4 \\ \hline \end{array} \quad \begin{array}{r} 8 \\ \times 5 \\ \hline \end{array} \quad \begin{array}{r} 8 \\ \times 9 \\ \hline \end{array} \quad \begin{array}{r} 8 \\ \times 6 \\ \hline \end{array} \quad \begin{array}{r} 10 \\ \times 2 \\ \hline \end{array} \quad \begin{array}{r} 11 \\ \times 4 \\ \hline \end{array} \quad \begin{array}{r} 1 \\ \times 7 \\ \hline \end{array} \quad \begin{array}{r} 5 \\ \times 9 \\ \hline \end{array} \quad \begin{array}{r} 11 \\ \times 7 \\ \hline \end{array}$$

$$\begin{array}{r} 7 \\ \times 10 \\ \hline \end{array} \quad \begin{array}{r} 5 \\ \times 11 \\ \hline \end{array} \quad \begin{array}{r} 5 \\ \times 1 \\ \hline \end{array} \quad \begin{array}{r} 1 \\ \times 10 \\ \hline \end{array} \quad \begin{array}{r} 6 \\ \times 6 \\ \hline \end{array} \quad \begin{array}{r} 5 \\ \times 3 \\ \hline \end{array} \quad \begin{array}{r} 12 \\ \times 2 \\ \hline \end{array} \quad \begin{array}{r} 2 \\ \times 1 \\ \hline \end{array} \quad \begin{array}{r} 11 \\ \times 12 \\ \hline \end{array} \quad \begin{array}{r} 10 \\ \times 11 \\ \hline \end{array}$$

$$\begin{array}{r} 3 \\ \times 1 \\ \hline \end{array} \quad \begin{array}{r} 8 \\ \times 2 \\ \hline \end{array} \quad \begin{array}{r} 3 \\ \times 10 \\ \hline \end{array} \quad \begin{array}{r} 2 \\ \times 7 \\ \hline \end{array} \quad \begin{array}{r} 7 \\ \times 6 \\ \hline \end{array} \quad \begin{array}{r} 10 \\ \times 8 \\ \hline \end{array} \quad \begin{array}{r} 6 \\ \times 11 \\ \hline \end{array} \quad \begin{array}{r} 12 \\ \times 3 \\ \hline \end{array} \quad \begin{array}{r} 12 \\ \times 5 \\ \hline \end{array} \quad \begin{array}{r} 12 \\ \times 8 \\ \hline \end{array}$$

$$\begin{array}{r} 4 \\ \times 4 \\ \hline \end{array} \quad \begin{array}{r} 8 \\ \times 3 \\ \hline \end{array} \quad \begin{array}{r} 4 \\ \times 2 \\ \hline \end{array} \quad \begin{array}{r} 3 \\ \times 6 \\ \hline \end{array} \quad \begin{array}{r} 8 \\ \times 8 \\ \hline \end{array} \quad \begin{array}{r} 11 \\ \times 1 \\ \hline \end{array} \quad \begin{array}{r} 7 \\ \times 9 \\ \hline \end{array} \quad \begin{array}{r} 6 \\ \times 1 \\ \hline \end{array} \quad \begin{array}{r} 7 \\ \times 4 \\ \hline \end{array} \quad \begin{array}{r} 9 \\ \times 9 \\ \hline \end{array}$$

Dividing by 1 to 9 (A)

Name: _____

Date: _____

Score: _____

Calculate each quotient.

$64 \div 8 = \square$

$28 \div 7 = \square$

$63 \div 9 = \square$

$36 \div 4 = \square$

$81 \div 9 = \square$

$72 \div 8 = \square$

$48 \div 8 = \square$

$9 \div 3 = \square$

$54 \div 6 = \square$

$3 \div 3 = \square$

$36 \div 6 = \square$

$56 \div 8 = \square$

$63 \div 7 = \square$

$36 \div 9 = \square$

$24 \div 6 = \square$

$21 \div 3 = \square$

$3 \div 1 = \square$

$56 \div 7 = \square$

$45 \div 9 = \square$

$9 \div 1 = \square$

$20 \div 4 = \square$

$27 \div 3 = \square$

$48 \div 6 = \square$

$8 \div 4 = \square$

$18 \div 6 = \square$

Dividing by 1 to 9 (B)

Name: _____

Date: _____

Score: _____

Calculate each quotient.

$63 \div 7 = \square$

$24 \div 6 = \square$

$48 \div 8 = \square$

$16 \div 4 = \square$

$54 \div 9 = \square$

$14 \div 7 = \square$

$48 \div 6 = \square$

$21 \div 3 = \square$

$49 \div 7 = \square$

$56 \div 7 = \square$

$63 \div 9 = \square$

$18 \div 6 = \square$

$36 \div 6 = \square$

$24 \div 4 = \square$

$42 \div 7 = \square$

$24 \div 3 = \square$

$56 \div 8 = \square$

$81 \div 9 = \square$

$64 \div 8 = \square$

$9 \div 1 = \square$

$36 \div 4 = \square$

$18 \div 3 = \square$

$4 \div 1 = \square$

$7 \div 7 = \square$

$42 \div 6 = \square$

Dividing by 1 to 9 (C)

Name: _____

Date: _____

Score: _____

Calculate each quotient.

$56 \div 8 = \square$

$64 \div 8 = \square$

$48 \div 6 = \square$

$3 \div 3 = \square$

$56 \div 7 = \square$

$12 \div 4 = \square$

$48 \div 8 = \square$

$21 \div 3 = \square$

$54 \div 6 = \square$

$81 \div 9 = \square$

$63 \div 9 = \square$

$1 \div 1 = \square$

$42 \div 7 = \square$

$5 \div 5 = \square$

$49 \div 7 = \square$

$54 \div 9 = \square$

$42 \div 6 = \square$

$7 \div 7 = \square$

$32 \div 4 = \square$

$72 \div 8 = \square$

$4 \div 1 = \square$

$27 \div 3 = \square$

$36 \div 6 = \square$

$2 \div 1 = \square$

$18 \div 3 = \square$

Dividing by 1 to 9 (D)

Name: _____

Date: _____

Score: _____

Calculate each quotient.

$49 \div 7 = \square$

$9 \div 9 = \square$

$72 \div 8 = \square$

$48 \div 8 = \square$

$81 \div 9 = \square$

$36 \div 9 = \square$

$42 \div 7 = \square$

$54 \div 9 = \square$

$42 \div 6 = \square$

$4 \div 2 = \square$

$54 \div 6 = \square$

$24 \div 8 = \square$

$56 \div 7 = \square$

$15 \div 5 = \square$

$48 \div 6 = \square$

$12 \div 6 = \square$

$56 \div 8 = \square$

$20 \div 5 = \square$

$63 \div 7 = \square$

$18 \div 9 = \square$

$36 \div 6 = \square$

$6 \div 2 = \square$

$16 \div 8 = \square$

$45 \div 5 = \square$

$9 \div 3 = \square$

4th Grade Book Report

Name _____

Book Title _____

Author _____

Please answer in complete sentences. Attach a piece of loose leaf paper if you need more room to write.

Setting (Where does the story take place?):

Main Characters (describe them in a few sentences each):

Describe the main events in the story.

Name _____

Book Title _____

Author _____

My favorite scene in book was _____
